



# INDIAN SCHOOL AL WADI AL KABIR

DEPARTMENT OF EVS (2021 – 2022)



TOPIC: THE SKY-SUN, MOON AND STARS

WORKSHEET-1

RESOURCE PERSON: Mrs. Saima Tabrez

NAME: \_\_\_\_\_ CLASS: II SEC: \_\_\_\_\_ DATE: \_\_\_\_\_

**Q1) Tia has an assignment given by her teacher to observe the changes in the sky throughout the day. Can you help her state whether it is morning, noon, evening or night by looking at the pictures? Use the blank provided to write your answers.**



\_\_\_\_\_

\_\_\_\_\_

\_\_\_\_\_

\_\_\_\_\_

**Q2) Read the given statements and mark them as True(T) or False(F).**

a ) The sun can be seen very low on one side of the sky at noon.

b) The sky looks same during all the seasons.

c) Sometimes we see the moon in the daytime too.


d) Evening is the brightest time of the day.

e) During the day, light comes from the sun.

**Q3) Guess the different seasons by looking at the pictures and the description given below.**


b) There are no clouds, it is very hot and the sky is blue. What kind of season is this?

\_\_\_\_\_



a) The air is moving fast, and the sun is not so bright. You feel like wearing a sweater. What kind of season is this?

\_\_\_\_\_



c) There are many dark clouds and there is lightning in the sky. What kind of season is this?

\_\_\_\_\_



**Q4) Name your favourite season and draw an activity that you like to do in that season.**

\_\_\_\_\_



# INDIAN SCHOOL AL WADI AL KABIR

DEPARTMENT OF EVS (2021 – 2022)

TOPIC: THE SKY-SUN, MOON AND STARS

WORKSHEET-2

RESOURCE PERSON: Mrs. Saima Tabrez

NAME: \_\_\_\_\_ CLASS: II SEC: \_\_\_\_\_ DATE: \_\_\_\_\_

**Q1) Unscramble the letters to find the correct spelling. Fill in the blanks to complete the sentences given below.**

- The sun, the moon and stars are \_\_\_\_\_ (hevealyn) bodies.
- The \_\_\_\_\_ (uns) is a star.
- The \_\_\_\_\_ (srats) start appearing as the sky turns dark.
- On rainy days, they are \_\_\_\_\_ (loudsc) in the sky.
- The sun, eight planets and other heavenly bodies go around the sun to form the \_\_\_\_\_ (orlas ytemss).

**Q2) Differentiate between Day and Night. Use the clue words given below to frame meaningful sentences.**

Day

---

---

---



Night

---

---

---

noon

dark

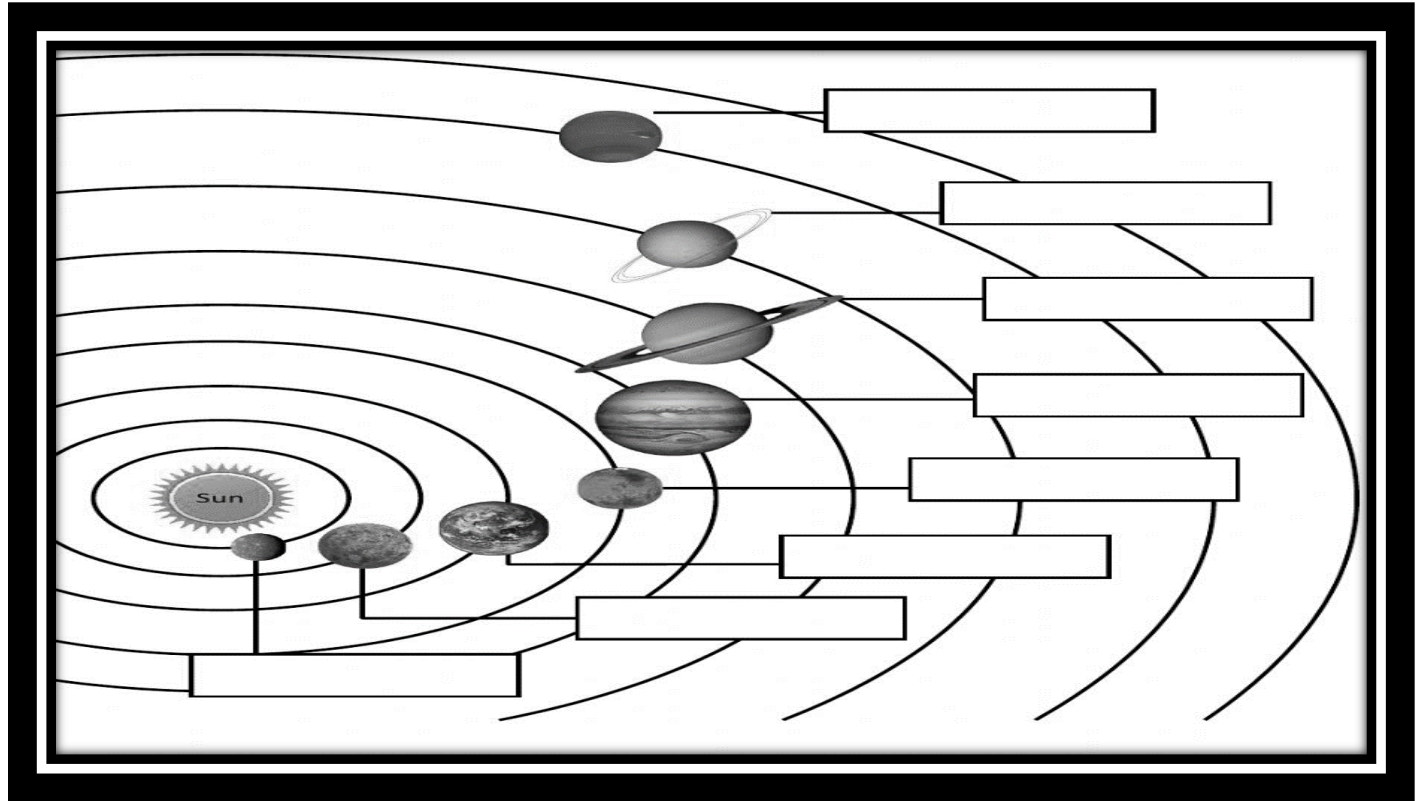
midnight

bright

the moon and stars

the sun shines

**Q3) Look at the picture given below and write the names of the planets in the correct order. You can use the help box given below.**



Venus   Earth   Mars   Mercury   Saturn   Uranus   Neptune   Jupiter

**Q4) Read the given clues. Draw and colour the objects seen in the sky.**

The brightest object in the sky, which rises in the east and sets in the west.



Twinkling objects, which are not visible in the morning





# INDIAN SCHOOL AL WADI AL KABIR

DEPARTMENT OF EVS (2021 – 2022)

**TOPIC: THE SKY-SUN, MOON AND STARS**

**CHAPTER CHECKUP WORKSHEET**

**RESOURCE PERSON: Mrs. Saima Tabrez**

**NAME:** \_\_\_\_\_ **CLASS: II SEC:** \_\_\_\_\_ **DATE:** \_\_\_\_\_

## I ) Circle the odd one in each group and shade it in yellow.

- a) summer      winter      September      rainy
- b) sun      moon      stars      seasons
- c) Jupiter      sun      Mercury      Venus

## II) Correct the following statements.

1) When the sun shines on one side of the Earth, that side has night.

---

---

2) On rainy days, there are no clouds in the sky.

---

---

3) The sun is a giant ball of water.

---

---

4) Eight heavenly bodies go around the moon, to form the solar system.

---



---

5) When the earth slowly spins, the part that has day, now gets bright and has night.

---

---

**III) Draw and colour the picture of your house on a bright sunny day and a picture of the scene at night.**



**IV) Answer the following questions.**

Q1) What is the sun?

---

---

Q2) Why do we not see the stars during the day?

---

---

Q3) How is the solar system formed?

---

---

Q4) What is a full moon?

---

---

Q5) When does it become night?

---

---



## HOTS

**Which is the space exploration agency of the Government of India? Where is its headquarters?**

---

---

**Mr. Abdul lives in India. At his dinner time, he called up his daughter, Mariyam who lives in the U.S.A. She received that phone call while having her breakfast. Why do you think they are having different meals at the same time?**

---

---

**Umaiza lives in Oman. She is visiting India during the month of December. She says, in December it gets dark very early. She has taken sweaters and gloves. Which season is she talking about?**

---

---